

GRADE-2

Assignment : 6

Date: Thursday, 28th October 2021

English:

Task 1-

Watch this video to learn about helping verbs has, have and had

<https://youtu.be/MiVt9fiNwi0>

Fill in the blanks with Has, Have or Had


1. Mary _____ a book.

2. A rabbit _____ long ears.

3. Shiv _____ a new bicycle.



4. They _____ breakfast at 6:30 this morning.



5. Rohan _____ six pencils.

6. I _____ many friends.

Homework

We _____ a big house when i was a kid.

Grandma _____ a pet rabbit.

Bonny _____ finished her project work.

. Do you _____ a balloon.

. This Hen _____ red wings.

. Sam _____ fun at the party last Sunday.

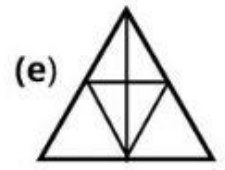
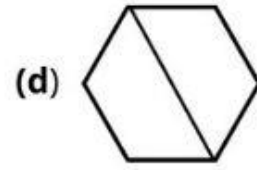

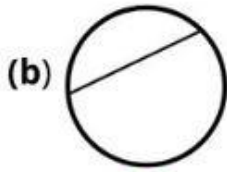
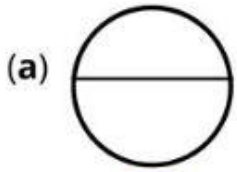


Maths:

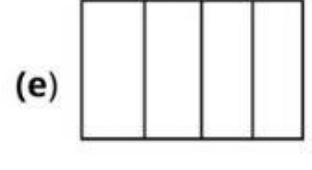
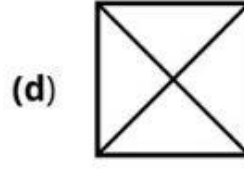
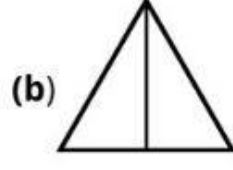
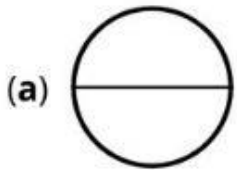
Task 1

Fraction


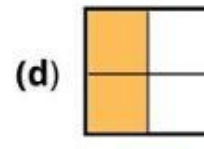

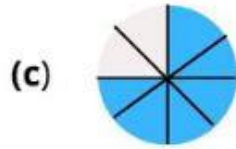
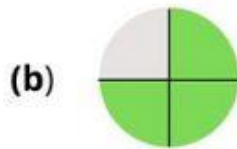


1. Put a tick in the box for the shape that is divided into equal parts.



2. Circle the shapes that are divided into halves.



3. What fraction of each figure is colored. Write their numerator and denominator as well.



Task 2

Name


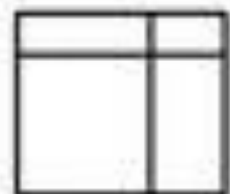
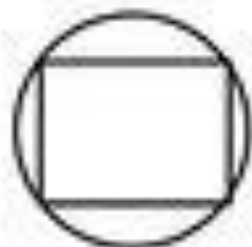
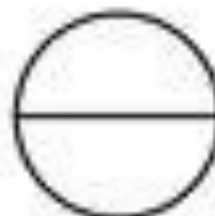


Date

Color the shapes

Equal

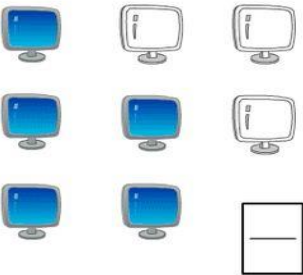
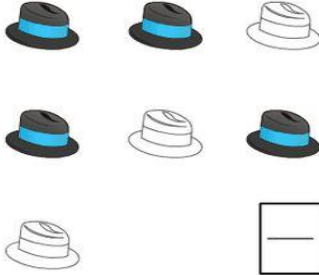
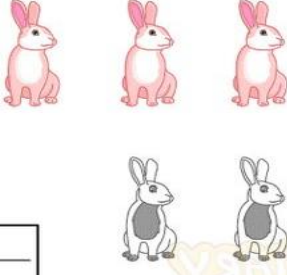

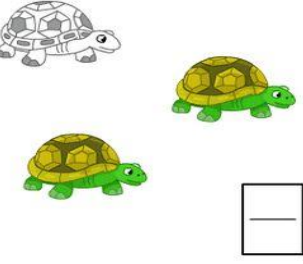


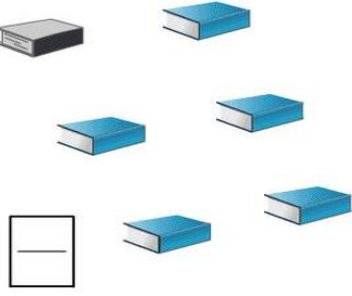


Unequal



Task 3

Write down the fraction that shows what part of each set is colored.

 <input type="text"/>	 <input type="text"/>	 <input type="text"/>	 <input type="text"/>
 <input type="text"/>	 <input type="text"/>	 <input type="text"/>	 <input type="text"/>

Hindi:

Day 1

क्रिया (Verbs)

https://www.youtube.com/watch?v=_0a998z_G4g

आओ पहचान करें-



परिभाषा- जिन शब्दों से किसी काम के करने या होने का पता चलता है, उन्हें क्रिया शब्द कहते हैं। जैसे- चलना, कूदना, भागना, सोना आदि।

Day 2

क्रिया

आप एक दिन में क्या-क्या काम करते हैं ? लिखिए-

१. मैं सुबह जल्दी _____ हूँ।
२. मैं उठने के बाद व्यायाम _____ हूँ।
३. उसके बाद _____ हूँ।
४. फिर एक गिलास दूध _____ हूँ।
५. फिर मैं पाठशाला _____ हूँ।

- वीडियो दिखाकर क्रिया शब्दों की पहचान करायी जाएगी ।

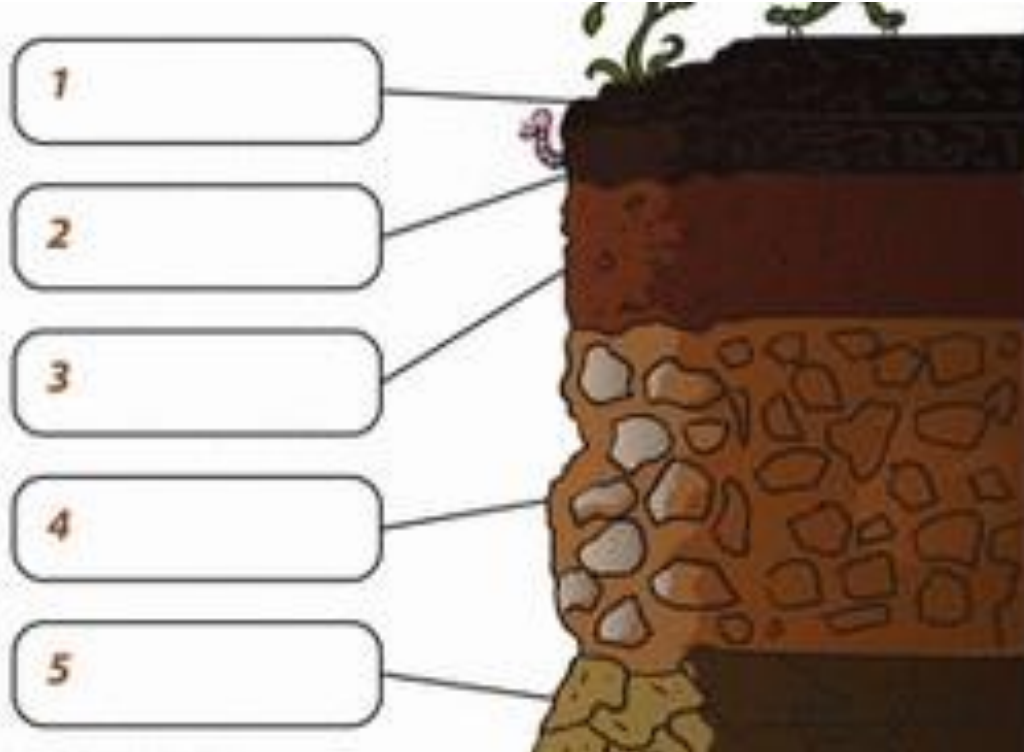
गृहकार्य

रसोईघर में अपनी माँ की मदद से नींबू पानी बनाइये और लिखकर बताइए कि इसके लिए आपको क्या-क्या करना पड़ा ।

UOI:

Activity

Label the layers of soil



Find out the meanings of the following words:

- i. Decaying
- ii. Organic matter
- iii. Weathered

Types of Soil in India

India is a big country. The Himalayan Mountains stretch along northern Indian border. A large portion of India is surrounded by the Bay of Bengal, Indian Ocean and Arabian Sea. In this huge country there are different types of soils.

1. Sandy Soil- It consists of small particles of weathered rock. Sandy soil is one of the worst type of soil for growing plants because of its very low nutrient content and poor water holding capacity, which makes it hard for the plant's roots to absorb water.

This soil is found in Rajasthan, southern Haryana, south-west Punjab and north-west Gujarat.



2. Silt Soil- It has much smaller particles compared to sandy soil. It is made up of rock and other mineral particles, which are smaller than sand and larger than clay. It is a smooth and fine quality of soil that holds water



better than sandy soil. It is found near the river, lake and other water bodies. The silt soil is more fertile compared to the other three types of soil.

This type of soil is found in northern Punjab, U.P. and Bihar.



3. Clay Soil- Particle size is smallest in this type of soil. The particles in this soil are tightly packed together with no airspaces. This soil has very good water holding capacity. It is very sticky to

touch when wet, but smooth when dried. It does not provide space for plant's root to flourish.

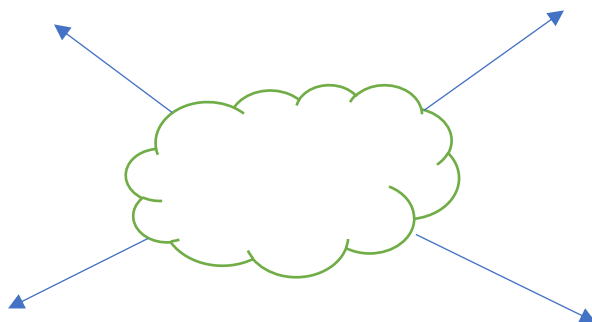
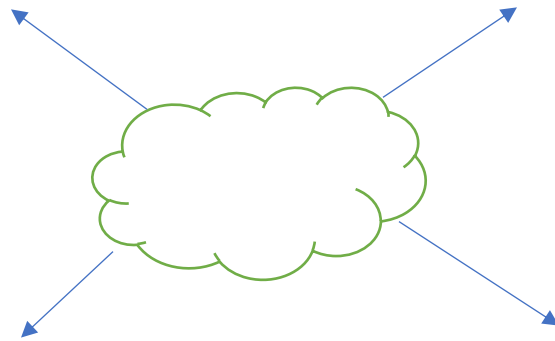
This type of soil is mostly found in Gujarat, Madhya Pradesh and Maharashtra.

4. Loamy Soil- It is a combination of sand, silt, clay and humus that makes it more suitable for farming. This soil is also known as agricultural soil.



This type of soil is found in Punjab, Haryana, U.P. and Bihar.

Reflect your understanding about any two types of soil through mind map.



ART:

Task - Drawing and coloring activity - trace the lines of the hut and color the picture on page 13.

Dance:

<https://youtube.com/shorts/DTxy9CYxAQ0?feature=share>

Watch and learn Kashmiri dance part-1

<https://youtu.be/SC2CKWqDOBU>

Watch and learn Kashmiri folk dance part-2